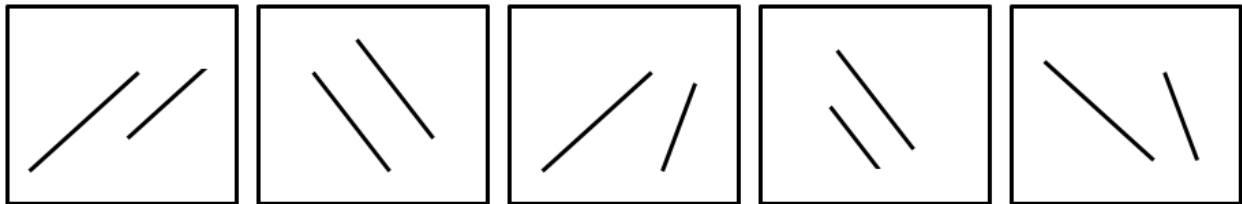


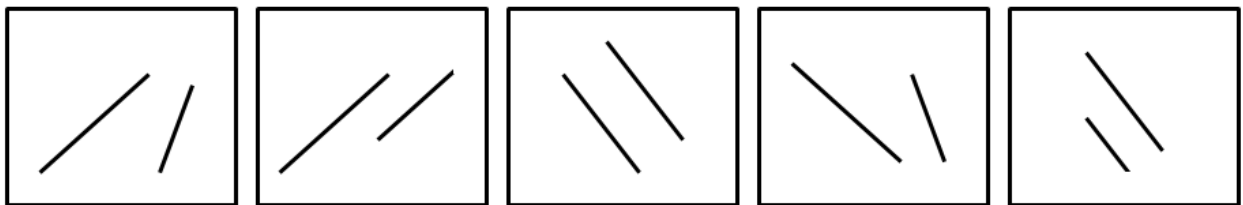
Post-Activity
Content Assessment

Name: _____ Class: _____

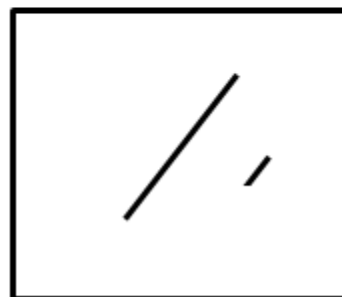
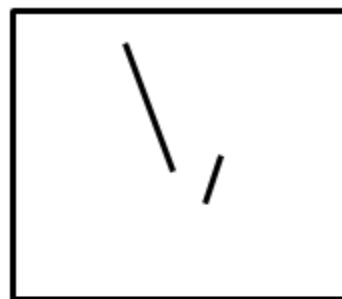
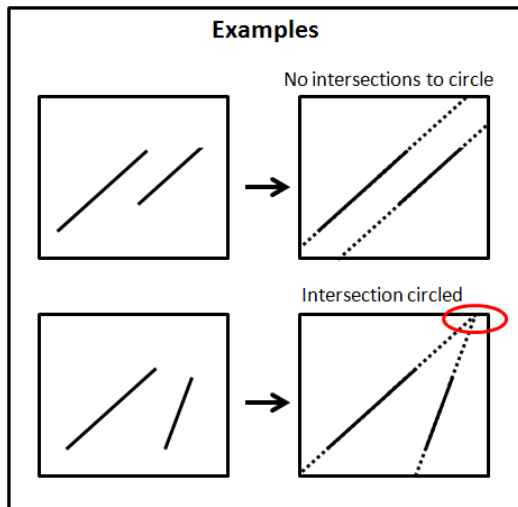
1. Circle the sets of lines that are parallel below:



2. Now, circle the sets of lines that are NOT parallel below:



3. Using the method in the examples provided, extend the lines below. Draw circles around any intersections.



} Do these!

**Post-Activity
Survey**

1. How much do you like science?

- a. A lot
- b. A little
- c. Not at all
- d. Don't know

2. How much do you like math?

- a. A lot
- b. A little
- c. Not at all
- d. Don't know

3. Do you think robots can be useful?

- a. Yes
- b. No
- c. I'm not sure

4. Do you think robots can be fun?

- a. Yes
- b. No
- c. I'm not sure